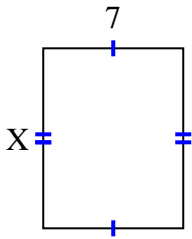


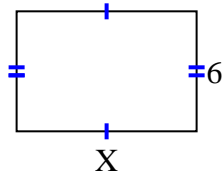


Find the value of X for each figure. Each figure is in centimeters (cm). Not to scale.

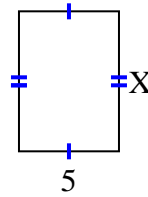
1) area = 63 cm^2



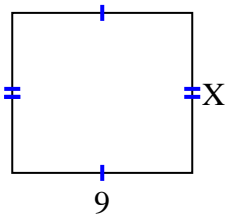
2) area = 54 cm^2



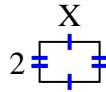
3) area = 35 cm^2



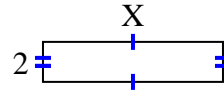
4) area = 72 cm^2



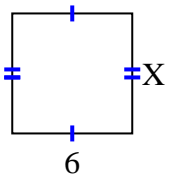
5) area = 6 cm^2



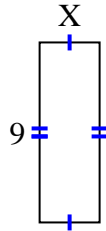
6) area = 18 cm^2



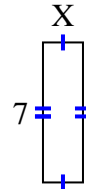
7) area = 36 cm^2



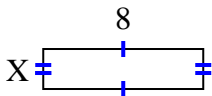
8) area = 27 cm^2



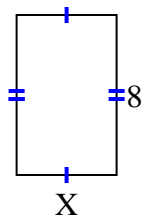
9) area = 14 cm^2



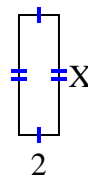
10) area = 16 cm^2



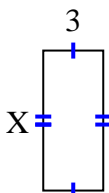
11) area = 40 cm^2



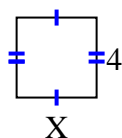
12) area = 12 cm^2



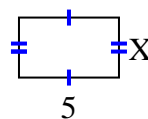
13) area = 21 cm^2



14) area = 16 cm^2



15) area = 15 cm^2



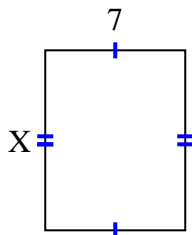
Answers

1. _____
2. _____
3. _____
4. _____
5. _____
6. _____
7. _____
8. _____
9. _____
10. _____
11. _____
12. _____
13. _____
14. _____
15. _____

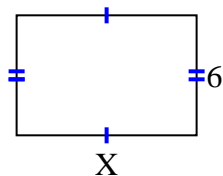


Find the value of X for each figure. Each figure is in centimeters (cm). Not to scale.

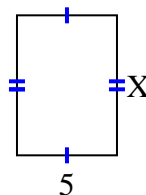
1) area = 63 cm^2



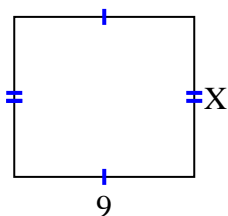
2) area = 54 cm^2



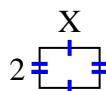
3) area = 35 cm^2



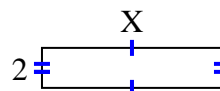
4) area = 72 cm^2



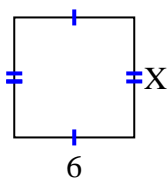
5) area = 6 cm^2



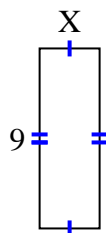
6) area = 18 cm^2



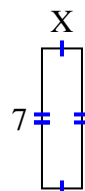
7) area = 36 cm^2



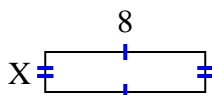
8) area = 27 cm^2



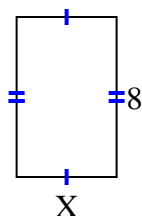
9) area = 14 cm^2



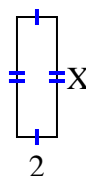
10) area = 16 cm^2



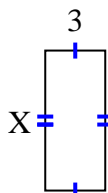
11) area = 40 cm^2



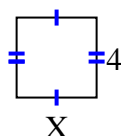
12) area = 12 cm^2



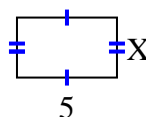
13) area = 21 cm^2



14) area = 16 cm^2



15) area = 15 cm^2



Answers

1. 9

2. 9

3. 7

4. 8

5. 3

6. 9

7. 6

8. 3

9. 2

10. 2

11. 5

12. 6

13. 7

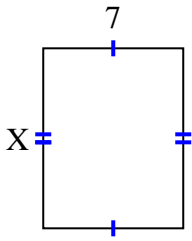
14. 4

15. 3

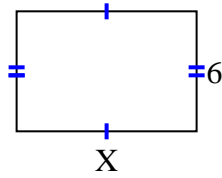


Find the value of X for each figure. Each figure is in centimeters (cm). Not to scale.

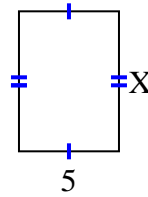
1) area = 63 cm^2



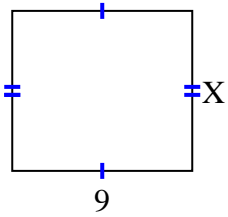
2) area = 54 cm^2



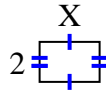
3) area = 35 cm^2



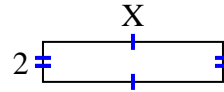
4) area = 72 cm^2



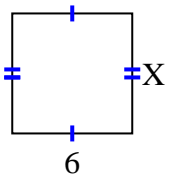
5) area = 6 cm^2



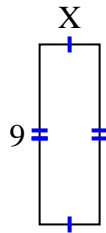
6) area = 18 cm^2



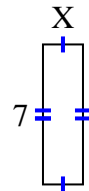
7) area = 36 cm^2



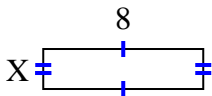
8) area = 27 cm^2



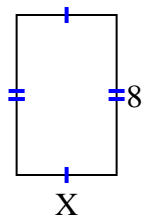
9) area = 14 cm^2



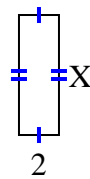
10) area = 16 cm^2



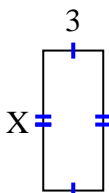
11) area = 40 cm^2



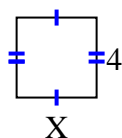
12) area = 12 cm^2



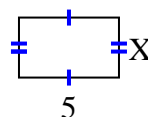
13) area = 21 cm^2



14) area = 16 cm^2



15) area = 15 cm^2



Answers

1. _____
2. _____
3. _____
4. _____
5. _____
6. _____
7. _____
8. _____
9. _____
10. _____
11. _____
12. _____
13. _____
14. _____
15. _____